



# Réponses aux Entraînements



①



$\frac{2}{3}$   $\frac{1}{3}$   $\frac{2}{4}$   $\frac{15}{3}$   $\frac{3}{3}$


$\frac{8}{7}$   $\frac{3}{4}$   $\frac{1}{2}$   $\frac{1}{4}$   $\frac{3}{5}$

②


$\frac{1}{2}$  un demi  


$\frac{2}{3}$  deux tiers  



$\frac{3}{4}$  trois quarts  


$\frac{1}{3}$  

③

$\frac{1}{3}$   $\frac{1}{4}$   $\frac{1}{2}$  

$\frac{2}{3}$   $\frac{3}{3}$   $\frac{1}{4}$  

$\frac{2}{3}$    $\frac{2}{4}$  

$\frac{3}{4}$  

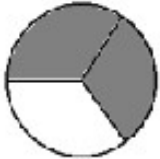


④ Complète la fraction ou écris la fraction représentée.


.....

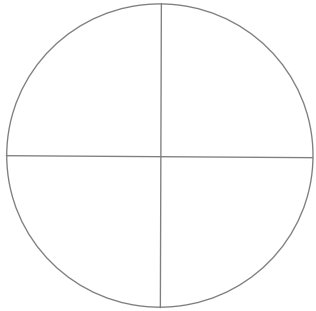
.....

.....




.....






un quart

un demi






.....

.....

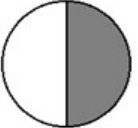



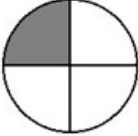
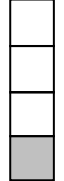
# J'utilise quelques fractions fréquentes ①

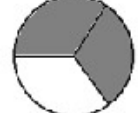



Ce fascicule te permettra de t'entraîner à maîtriser la compétence **NOMBRES N19** du fichier *PIDAPI*.

Écris dessus avec un crayon à papier.

$\frac{1}{2}$  un demi  

$\frac{1}{4}$  un quart  

$\frac{2}{3}$  deux tiers  

numérateur

dénominateur

« j'en prends 2 »

unité partagée en 3



1 Entoure en rouge les fractions qui ont 3 comme dénominateur. Entoure en bleu les fractions qui ont 1 comme numérateur.



$$\frac{2}{3}$$

$$\frac{1}{3}$$

$$\frac{2}{4}$$

$$\frac{1}{2}$$

$$\frac{3}{3}$$

$$\frac{3}{4}$$

$$\frac{1}{4}$$

$$\frac{15}{3}$$



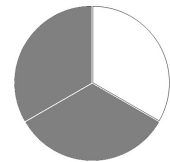
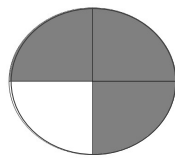


2 Entoure de la même couleur les fractions identiques.



$$\frac{1}{2}$$

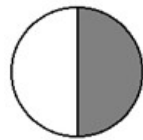


deux tiers

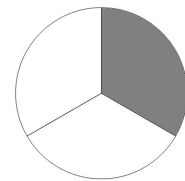


$$\frac{2}{3}$$

$$\frac{3}{4}$$



un demi

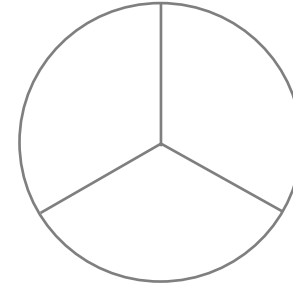


$$\frac{1}{3}$$

trois quarts



3 Colorie ce qui correspond à la fraction.


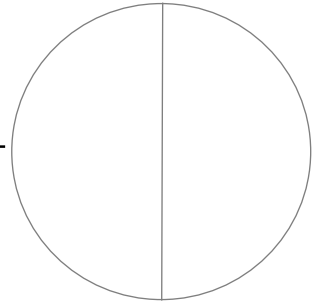


$$\frac{1}{3}$$



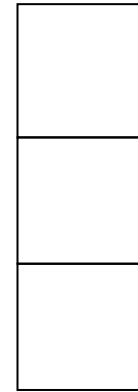
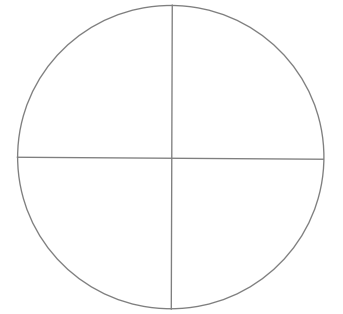
$$\frac{1}{4}$$

$$\frac{1}{2}$$

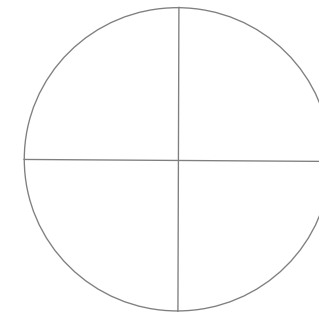


$$\frac{3}{3}$$

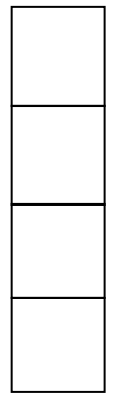
$$\frac{1}{4}$$



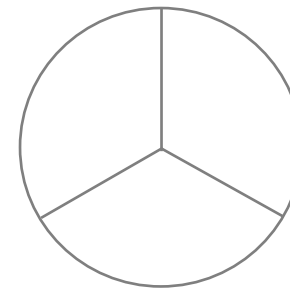
$$\frac{2}{3}$$



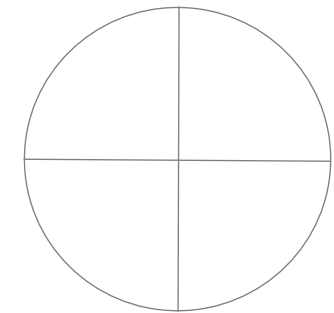
$$\frac{2}{4}$$



$$\frac{3}{4}$$



$$\frac{2}{3}$$



$$\frac{3}{4}$$